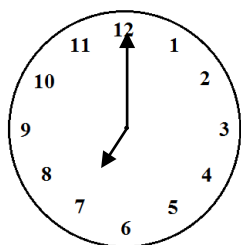


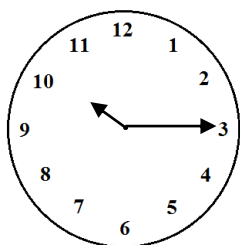
Digitale en analoge tijd

1. Schrijf de digitale tijden onder de klok.



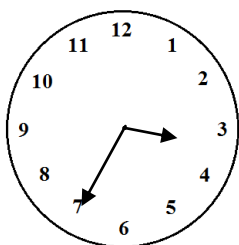
7:00

19:00



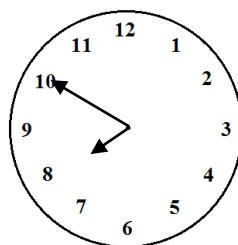
10:15

22:15



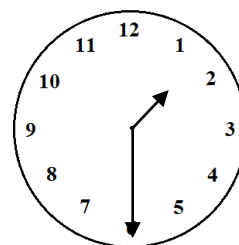
3:35

15:35



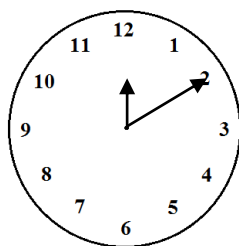
7:50

19:50



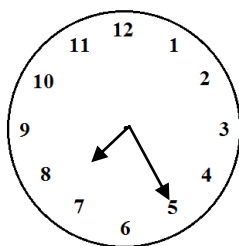
1:30

13:30



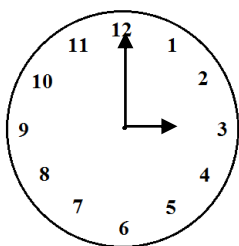
12:10

00:10



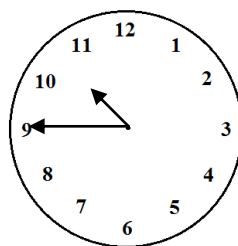
7:25

19:25



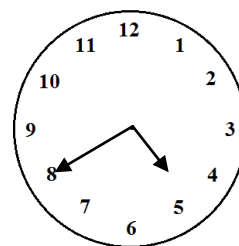
3:00

15:00



10:45

22:45



4:40

16:40

2. Welke digitale tijden horen bij elkaar?

