



# Hoe vaak zie je Elmer?

Naam: .....




Two Elmer elephants are shown in a box. One is on the left, facing right, and the other is on the right, facing left. Both are drawn with a grid pattern.

○ ○ ○ ○ ○ ○



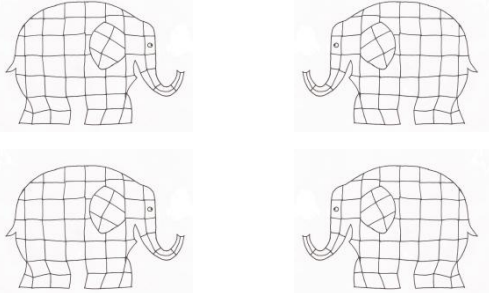
Three Elmer elephants are shown in a box. Two are at the top, one on the left and one on the right, both facing right. The third is at the bottom center, facing right.

○ ○ ○ ○ ○ ○




Five Elmer elephants are shown in a box. They are arranged in two rows: three in the top row and two in the bottom row. They are facing various directions.

○ ○ ○ ○ ○ ○




Four Elmer elephants are shown in a box. They are arranged in two rows of two. The top row elephants are facing right, and the bottom row elephants are facing left.

○ ○ ○ ○ ○ ○



One Elmer elephant is shown in a box, facing right.

○ ○ ○ ○ ○ ○



Six Elmer elephants are shown in a box. They are arranged in two rows of three. The top row elephants are facing right, and the bottom row elephants are facing left.

○ ○ ○ ○ ○ ○