



Hoe vaak zie je een blad?

Naam:




Three leaves are arranged on a diamond-shaped grid. One leaf is at the top-left, one at the top-right, and one at the bottom-center.

○ ○ ○ ○ ○ ○




Five leaves are arranged on a diamond-shaped grid. Two are in the top row, and three are in the bottom row.

○ ○ ○ ○ ○ ○




Six leaves are arranged on a diamond-shaped grid in two rows of three.

○ ○ ○ ○ ○ ○




Two leaves are arranged on a diamond-shaped grid, one on the left and one on the right.

○ ○ ○ ○ ○ ○



A single leaf is centered on a diamond-shaped grid.

○ ○ ○ ○ ○ ○



Four leaves are arranged on a diamond-shaped grid in two rows of two.

○ ○ ○ ○ ○ ○